



2 Shade each of the following.

(a) A quarter of the square

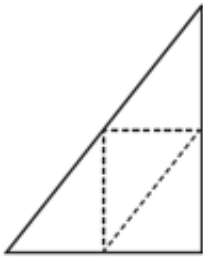


2 Shade each of the following.

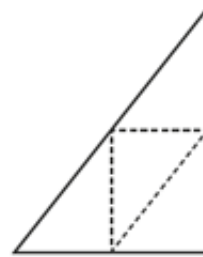
(a) A quarter of the square



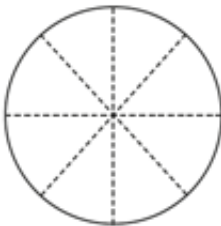
(c) A quarter of the triangle



(c) A quarter of the triangle



(d) A quarter of the circle



(d) A quarter of the circle

