
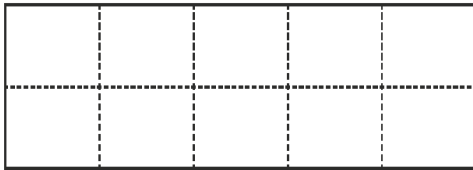


2 Shade each of the following.

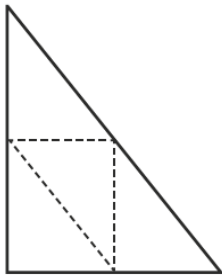
(a) Half of the square



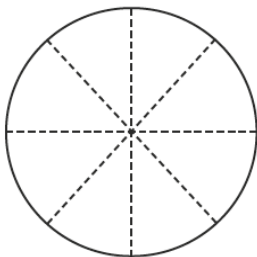
(b) Half of the rectangle



(c) Half of the triangle

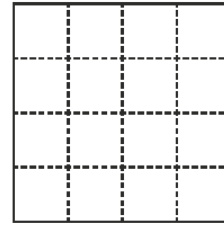


(d) Half of the circle

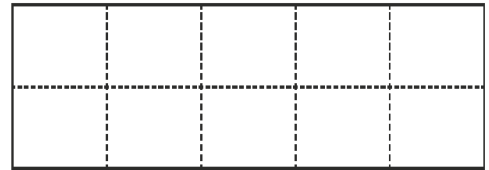


2 Shade each of the following.

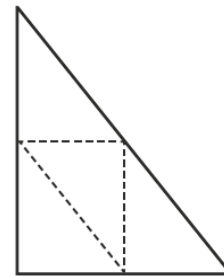
(a) Half of the square



(b) Half of the rectangle



(c) Half of the triangle



(d) Half of the circle

