

- 1 There are 5 canoes.  
Each canoe carries 3 people.  
How many people are there altogether?




There are  people altogether.

- 2 There are 3 houses.  
Each house has 6 windows.  
How many windows are there in all?




There are  windows in all.

- 3 There are 3 fish tanks.  
Each tank has 8 fish.  
How many fish are there in all?



There are  fish in all.

- 4 There are 6 nests.  
Each nest has 5 birds in it.  
How many birds are there altogether?




There are  birds altogether.

- 5 There are 4 children.  
Each child has 9 marbles.  
How many marbles do they have in all?




There are  marbles in all.

- 6 There are 7 sticks.  
Each stick has 5 marshmallows on it.  
How many marshmallows are there in all?



There are  marshmallows in all.

- 4 There are 6 cakes.  
Each cake has 3 cherries.  
How many cherries are there in all?



There are  cherries in all.

- 5 There are 8 bicycles.  
Each bicycle has 2 wheels.  
How many wheels are there altogether?



There are  wheels altogether.