


Each group has _____ cats.

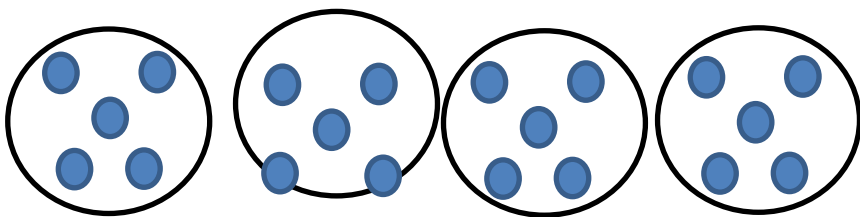
There are _____ groups.



There are a total of _____ cats.

Each group has _____ dots.

There are _____ groups.



There are a total of _____ dots.

Each group has _____ stars.


There are _____ groups.



There are a total of _____ stars.

Each group has _____ dogs.

There are _____ groups.



There are a total of _____ dogs.