



If you have 67 slices of pizza and 15 slices are eaten, how many slices would you have left?



twinkl.com

If you have 72 rubber ducks and are given another 17, how many rubber ducks would you have?



twinkl.com

If you have 100 flowers and give 34 of them away, how many would you have left?



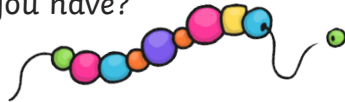
twinkl.com

If you invite 53 people to a party and 24 of them say they can't come, how many people will be at the party?



twinkl.com

If you find 49 wooden beads under the sofa and then find another 50 in a box, how many beads would you have?



twinkl.com

If you count 85 ladybirds in your garden and 21 fly away, how many ladybirds would be left?



twinkl.com

If you have 47 pennies and you find another 13 in your pocket, how many pennies would you have?




twinkl.com

If you have 57 gobstoppers and eat 18 of them, how many would you have left?



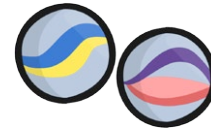
twinkl.com

If you bake 50 cookies and then bake another 45, how many cookies would you have baked?



twinkl.com

If you have 28 marbles and win another 29, how many marbles would you have?



twinkl.com

If you count 67 rabbits in a field and 52 of them hop away, how many rabbits would be left?



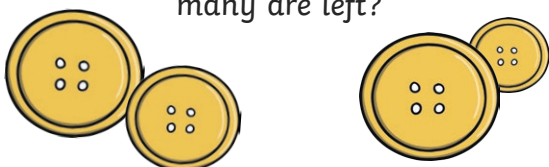
twinkl.com

If you count 70 leaves on a path and another 24 leaves fall to the ground, how many leaves would there be?



twinkl.com

If you have 54 buttons but lose 14 of them, how many are left?



twinkl.com

If you have 38 sweets and buy 19 more, how many sweets will you have?



twinkl.com