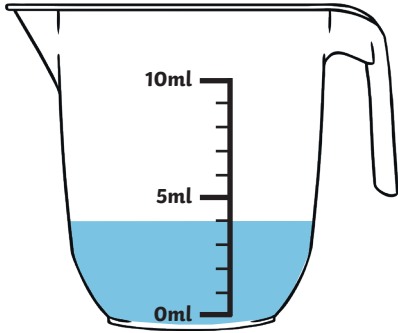


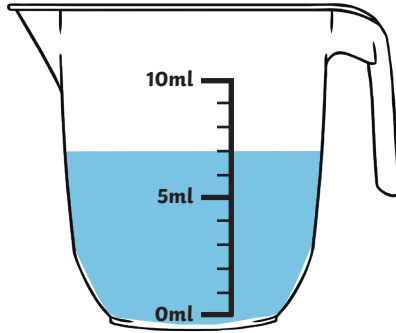
# Measuring Volume

**Aim:** I can measure volume.

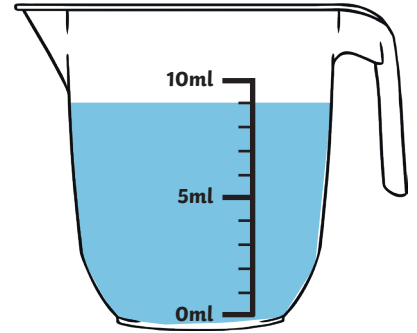
**How much water is there in each jug?**



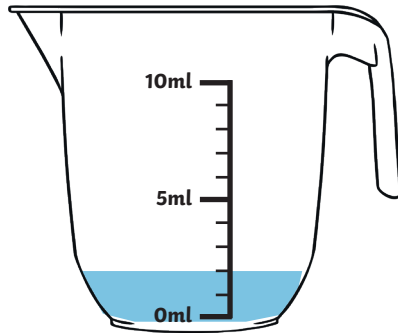
1. \_\_\_\_\_ ml



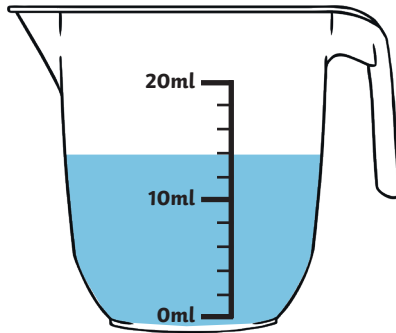
2. \_\_\_\_\_ ml



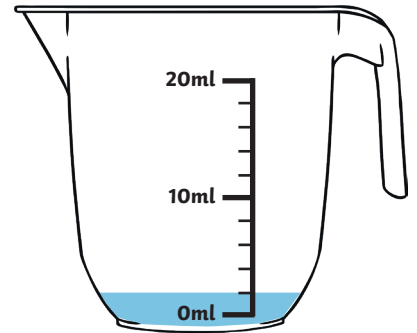
3. \_\_\_\_\_ ml



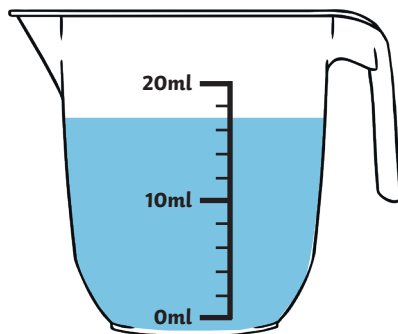
4. \_\_\_\_\_ ml



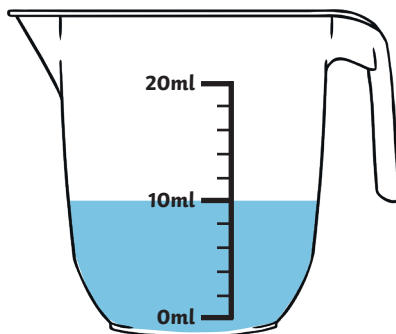
5. \_\_\_\_\_ ml



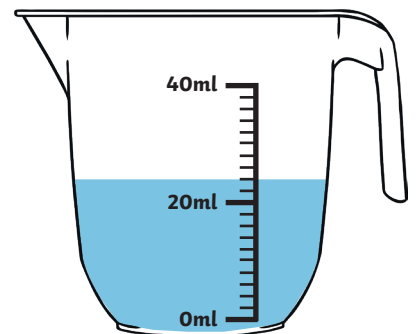
6. \_\_\_\_\_ ml



7. \_\_\_\_\_ ml



8. \_\_\_\_\_ ml

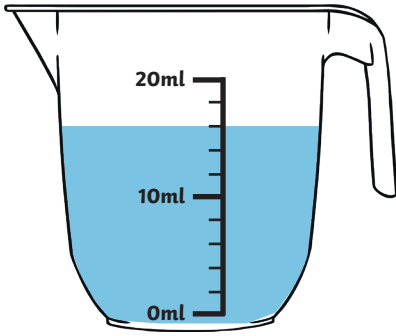


9. \_\_\_\_\_ ml

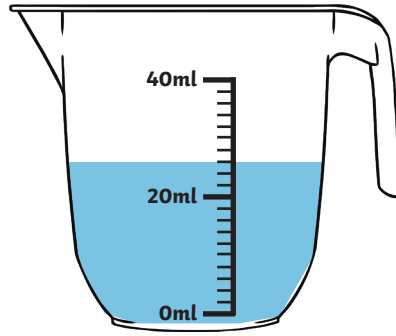
# Measuring Volume

**Aim:** I can measure volume.

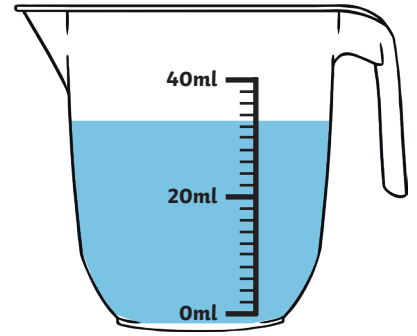
**How much water is there in each jug?**



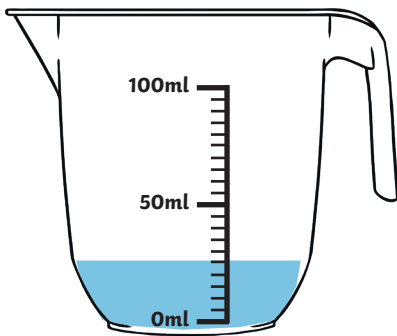
1. \_\_\_\_\_ ml



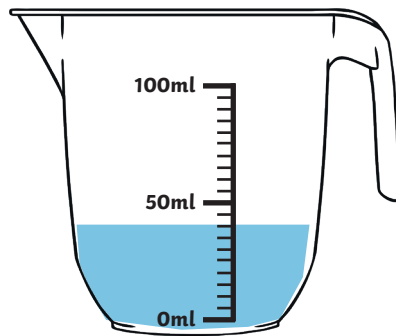
2. \_\_\_\_\_ ml



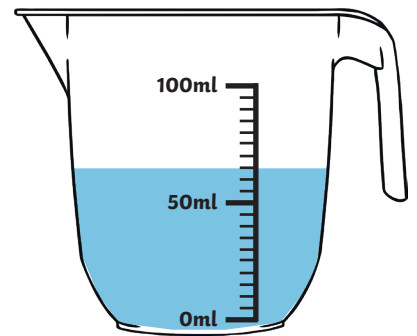
3. \_\_\_\_\_ ml



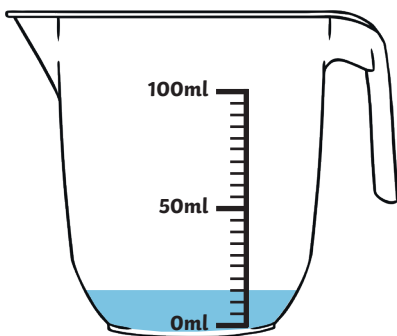
4. \_\_\_\_\_ ml



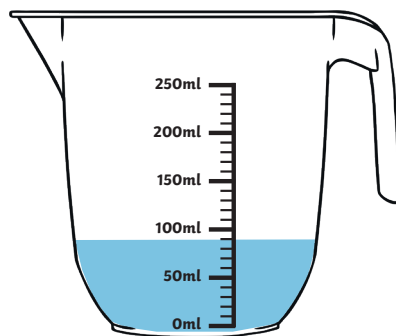
5. \_\_\_\_\_ ml



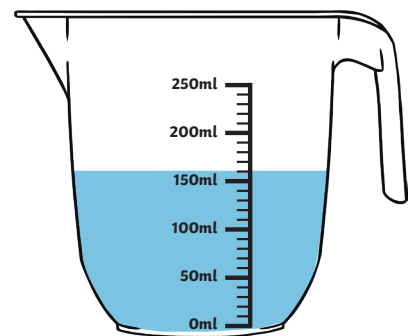
6. \_\_\_\_\_ ml



7. \_\_\_\_\_ ml



8. \_\_\_\_\_ ml

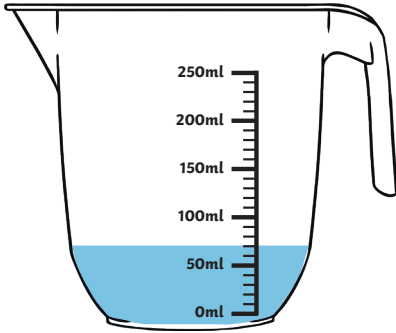


9. \_\_\_\_\_ ml

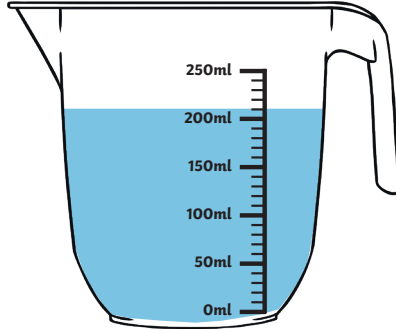
# Measuring Volume

**Aim:** I can measure volume.

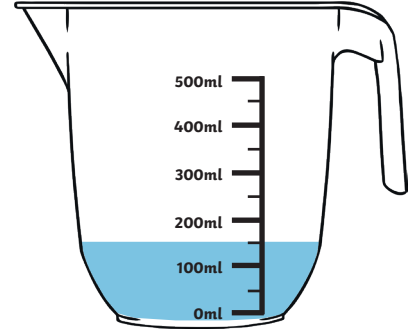
**How much water is there in each jug?**



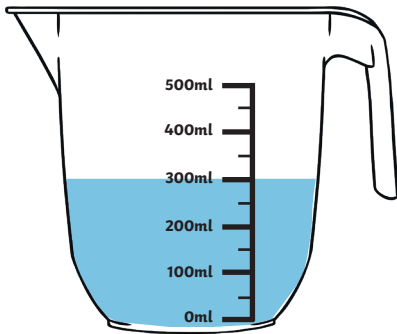
1. \_\_\_\_\_ ml



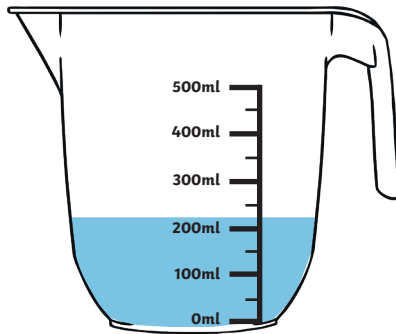
2. \_\_\_\_\_ ml



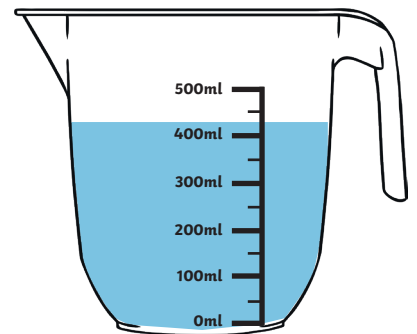
3. \_\_\_\_\_ ml



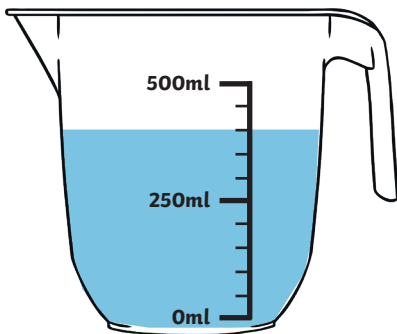
4. \_\_\_\_\_ ml



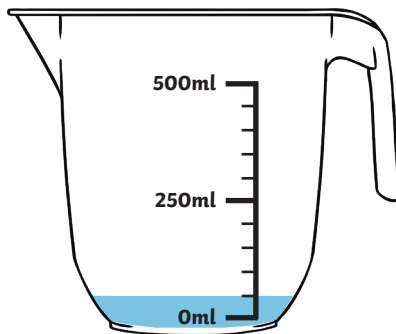
5. \_\_\_\_\_ ml



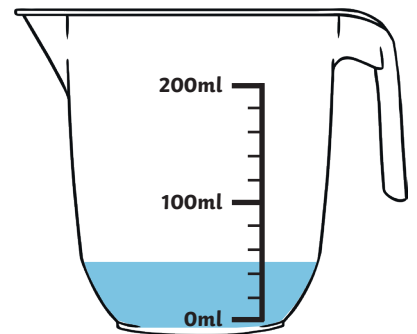
6. \_\_\_\_\_ ml



7. \_\_\_\_\_ ml



8. \_\_\_\_\_ ml



9. \_\_\_\_\_ ml

# Measuring Volume Answers

★	★★	★★★
1. 4ml	1. 16ml	1. 70ml
2. 7ml	2. 26ml	2. 210ml
3. 9ml	3. 33ml	3. 150ml
4. 2ml	4. 25ml	4. 300ml
5. 14ml	5. 40ml	5. 225ml
6. 2ml	6. 65ml	6. 425ml
7. 17ml	7. 15ml	7. 400ml
8. 10ml	8. 90ml	8. 50ml
9. 24ml	9. 160ml	9. 50ml